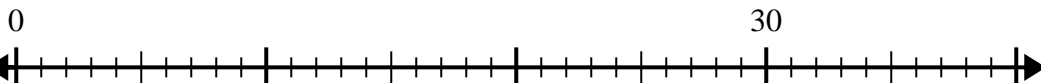


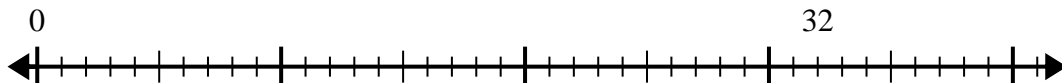


Use the number line to solve the division problem.

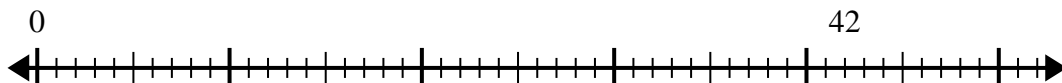
1)  $30 \div 6 =$



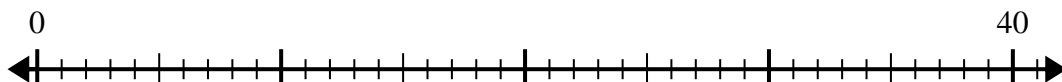
2)  $32 \div 4 =$



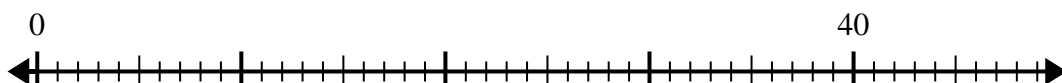
3)  $42 \div 7 =$



4)  $40 \div 5 =$



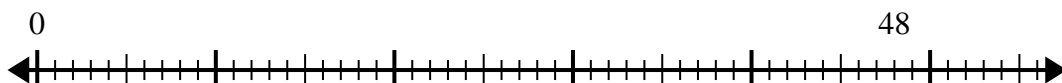
5)  $40 \div 8 =$



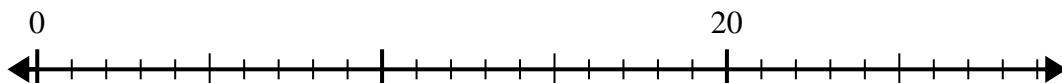
6)  $42 \div 6 =$



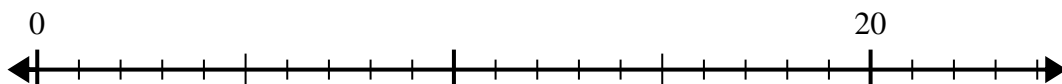
7)  $48 \div 6 =$



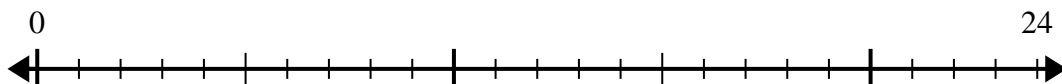
8)  $20 \div 4 =$



9)  $20 \div 5 =$



10)  $24 \div 4 =$



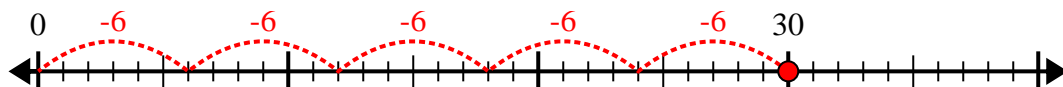
Answers

- 1. \_\_\_\_\_
- 2. \_\_\_\_\_
- 3. \_\_\_\_\_
- 4. \_\_\_\_\_
- 5. \_\_\_\_\_
- 6. \_\_\_\_\_
- 7. \_\_\_\_\_
- 8. \_\_\_\_\_
- 9. \_\_\_\_\_
- 10. \_\_\_\_\_

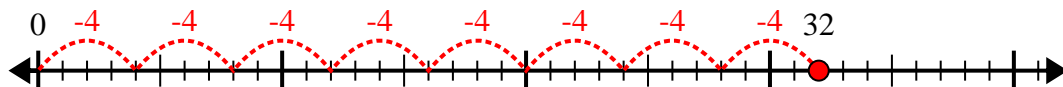


Use the number line to solve the division problem.

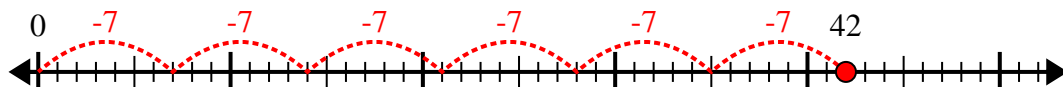
1)  $30 \div 6 =$



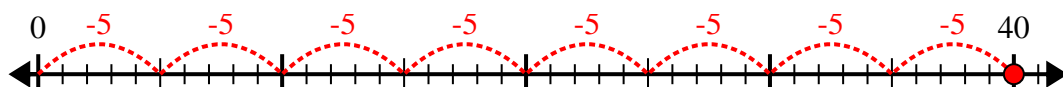
2)  $32 \div 4 =$



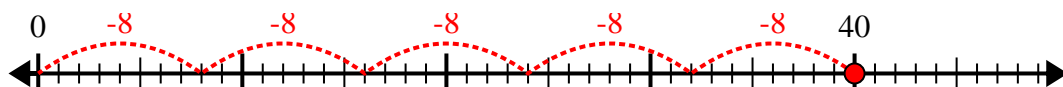
3)  $42 \div 7 =$



4)  $40 \div 5 =$



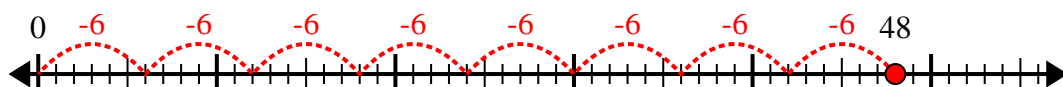
5)  $40 \div 8 =$



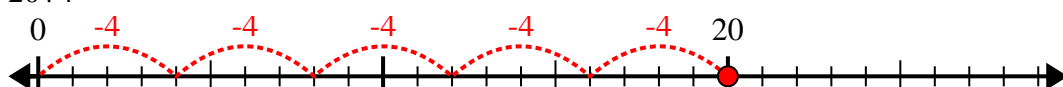
6)  $42 \div 6 =$



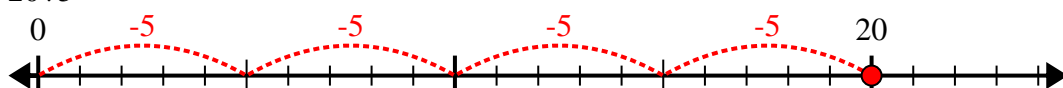
7)  $48 \div 6 =$



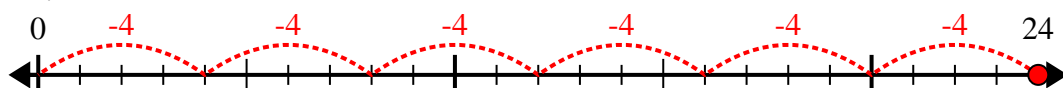
8)  $20 \div 4 =$



9)  $20 \div 5 =$



10)  $24 \div 4 =$



Answers

1. 5

2. 8

3. 6

4. 8

5. 5

6. 7

7. 8

8. 5

9. 4

10. 6